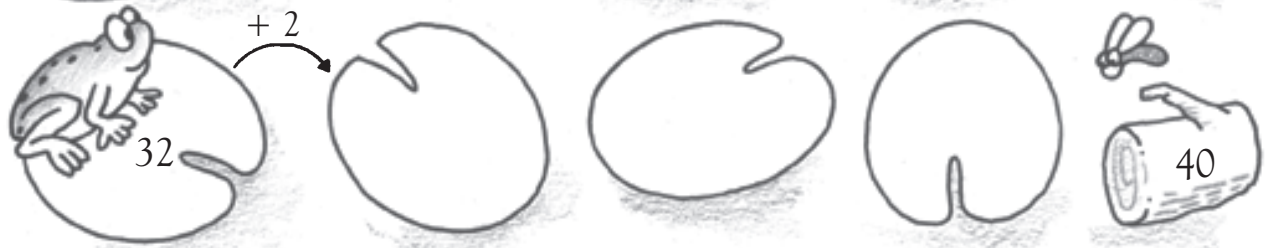
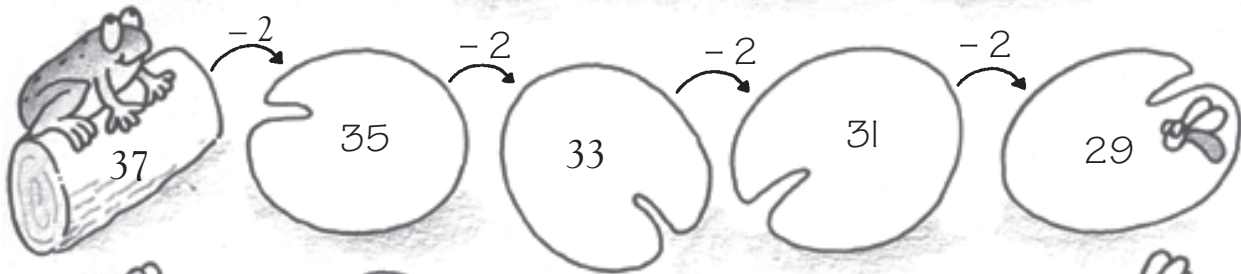
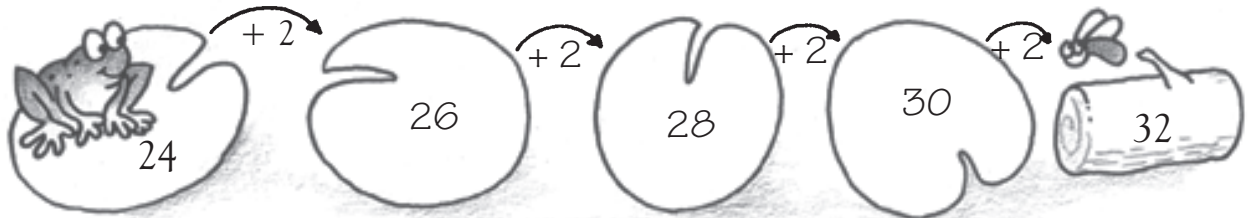


Counting by 2s



Draw the “hops” and write the numbers. Do you need to add or subtract?



Counting by 2s



Draw the “hops” and write the numbers. Do you need to add or subtract?

Row 1: 24 $+2$ 26 $+2$ 28 $+2$ 30 $+2$ 32

Row 2: 37 -2 35 -2 33 -2 31 -2 29

Row 3: 48 -2 46 -2 44 -2 42 -2 40

Row 4: 43 $+2$ 45 $+2$ 47 $+2$ 49 $+2$ 51

Row 5: 32 $+2$ 34 $+2$ 36 $+2$ 38 $+2$ 40

Row 6: 21 -2 19 -2 17 -2 15 -2 13

Row 7: 43 -2 41 -2 39 -2 37 -2 35

It may be necessary to point out that some of the patterns show an increase and some a decrease. If children have difficulty, they can count by 1s two times for each set.